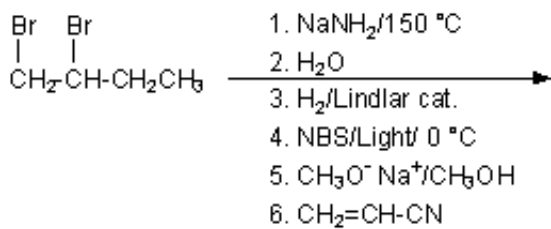
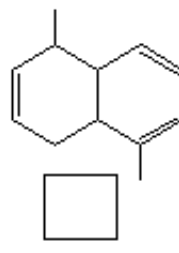
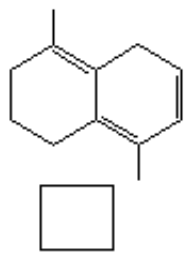
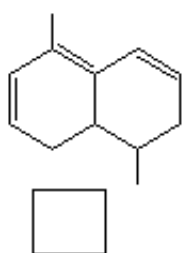


Quiz 14

1.



2. Place the following compounds in order of increasing UV absorbance maxima (1=shortest wavelength, 3=longest wavelength).



3. Label the following molecules as aromatic, nonaromatic, or antiaromatic.

